


# Level 1

For office use only														
A1	Individual questionnaire number							A2	Household questionnaire number					
A3	Household control sheet number							A4	Pcode from household roster					



2.  $12 \div 3 =$

- a) 2
- b) 3
- c) 4
- d) 5

3.  $4 \times 7 =$

- a) 4
- b) 7
- c) 18
- d) 28

4. If you count by 2 which number should go next ?

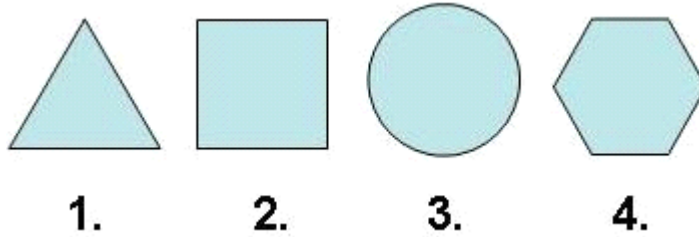
2 4 6 8 10 ?

- a) 10
- b) 11
- c) 12
- d) 13

5.  $16 ? 8 = 2$

- a) +
- b) -
- c) x
- d) ÷

6. Which shape is the odd one out?



- a) 1.
- b) 2.
- c) 3
- d) 4.

7. Which item is the cheapest?



a) R1.80



b) R2.00



c) 0.90c



d) R5.00

8. What time is on the clock?




- a) 2
- b) 2:30
- c) 3
- d) 3:30

9.  $1\text{cm} = ?$

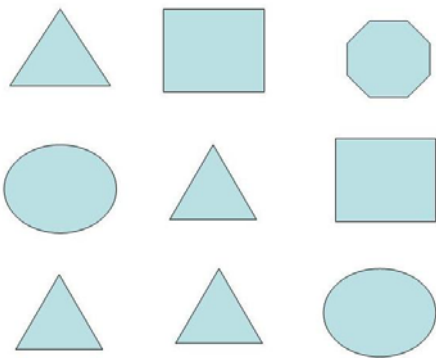
- a) 10 mm
- b) 100 mm
- c) 1000 mm
- d) 10000 mm

10. How many squares are shaded?




- a) 2 out of 16
- b) 3 out of 16
- c) 4 out of 16
- d) 5 out of 16

11. How many triangles are in this figure?




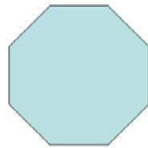
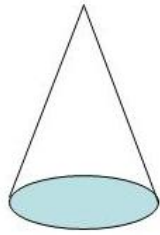
- a) 2
- b) 3
- c) 4
- d) 5

12. How many sides does this object have?



- a) 4
- b) 5
- c) 6
- d) 7

13. Which shape makes base of the cone?



a)

b)

c)

d)

14. Which city had the hottest temperature?

City	Temperature ° C
Cape Town	25
Johannesburg	24
Harare	20
<b>Nairobi</b>	22

- a) Cape Town
- b) Johannesburg
- c) Harare
- d) Nairobi

15. How many of these numbers are greater than 6?

**2, 4, 6, 3, 8, 1, 11, 12**

- a) 3
- b) 4
- c) 6
- d) 7